


NOME: \_\_\_\_\_










DATA: \_\_\_\_/\_\_\_\_/\_\_\_\_

VAMOS DIVIDIR?

LEI: 1 CARRO  PARA CADA 4  RODAS

CONTE AS RODAS, DIVIDINDO-AS EM GRUPOS DE 4 E COMPLETE A TABELA:



DESENHO:	TOTAL DE  RODAS	1 CARRO  PARA CADA 	QUANTOS CARROS PODEMOS MONTAR?
	12	÷ 4	= 3
		÷ 4	=
		÷ 4	=
		÷ 4	=
		÷ 4	=
			
	28		