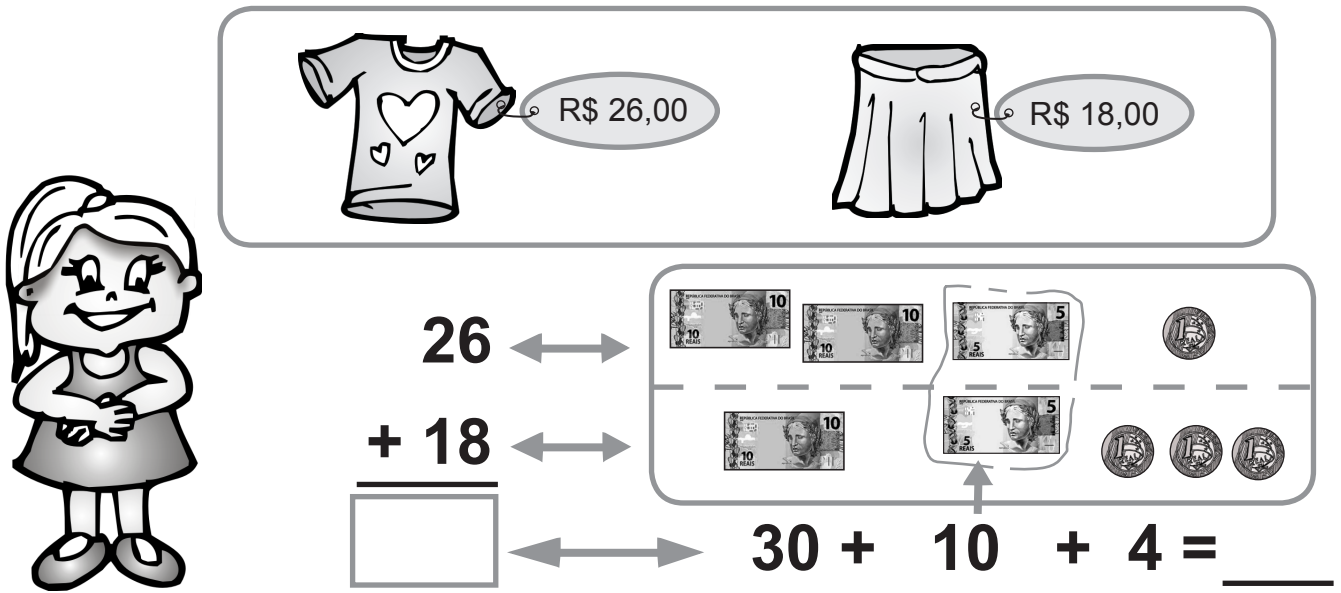






1) Veja como Ana Maria calcula quanto irá gastar em suas compras.



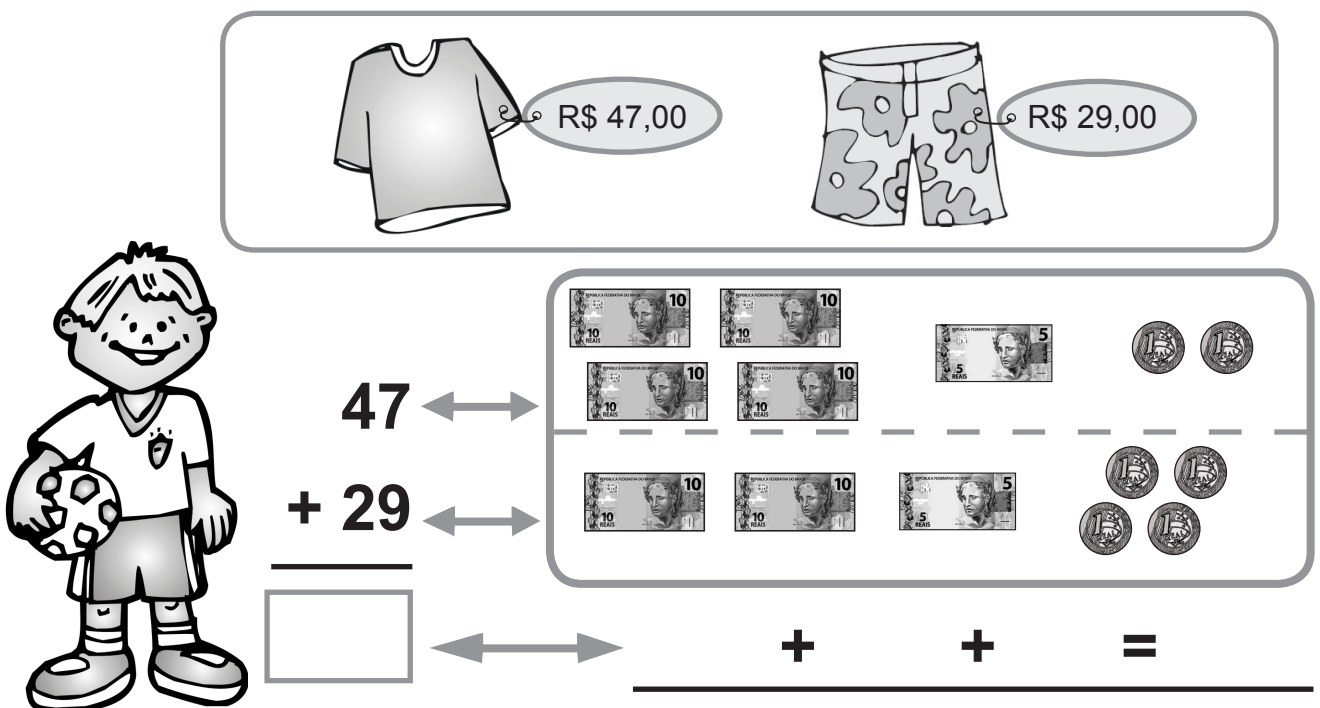
 R\$ 26,00  R\$ 18,00



26 ↔ 


$+ 18$ ↔ 


↔ $30 + 10 + 4 = \underline{\quad}$

2) Calcule quanto Guilherme irá gastar em suas compras, agrupando as duas notas de 5 reais.



 R\$ 47,00  R\$ 29,00

47 ↔ 

$+ 29$ ↔ 

↔ $\quad + \quad + \quad = \underline{\quad}$

3) Calcule desenhando cédulas de  ,  e  .

28 ↔ 

$+ 37$ ↔ 

↔ $\quad + \quad + \quad = \underline{\quad}$